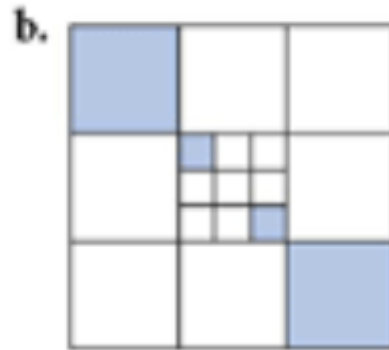
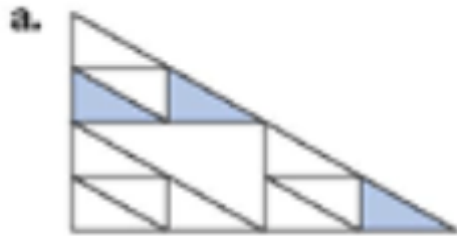
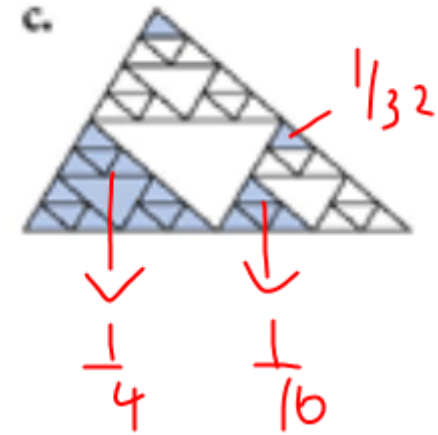


4. Write an addition expression that gives the combined total of shaded areas in each figure. Then evaluate the expression. The area of each figure is originally 1.



$$\frac{2}{9} + \frac{2}{81}$$



$$\frac{1}{4} + \frac{1}{16} + \frac{2}{32}$$

$$\frac{1}{4} + \frac{1}{8}$$

$$\frac{3}{8}$$