
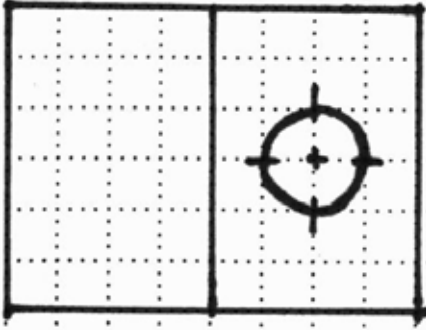



A

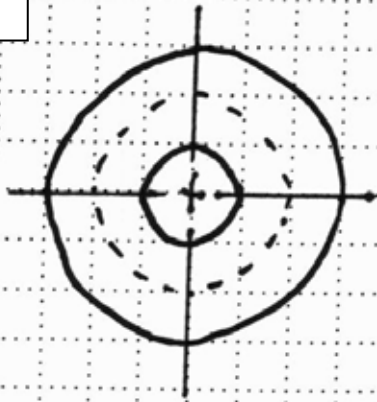
Dimension the object below completely.
Follow the principles of good dimensioning.



 = 0.25"


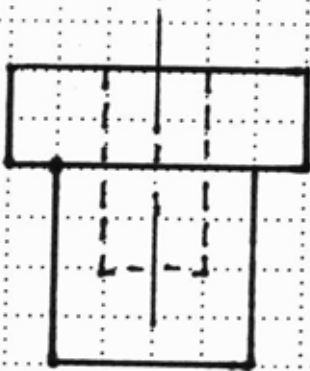
Title: Dimensioning 3, Classwork Cylinders, Cones, & Holes	Name:	CID:	Date:
--	--------------	-------------	--------------

Dimension the object below completely.
Follow the principles of good dimensioning.



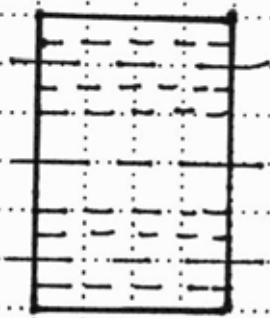
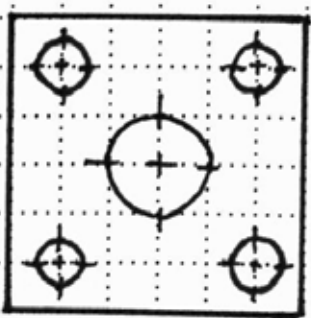
B

$\square = 0.25''$



C

$\square = 0.25''$



Title: Dimensioning 3, Classwork Cylinders, Cones, & Holes	Name:	CID:	Date:
--	--------------	-------------	--------------