

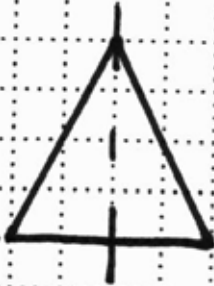



**A**

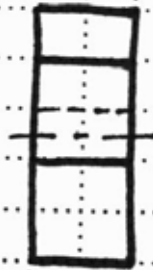
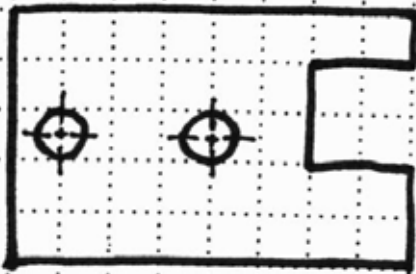
Dimension the object below completely.  
Follow the principles of good dimensioning.

 = 0.25"



**B**

 = 0.25"



**Title:** Dimensioning 3, Homework  
Cylinders, Cones, & Holes

**Name:**

**CID:**

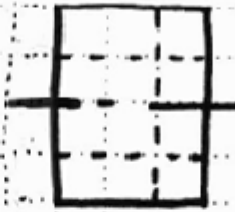
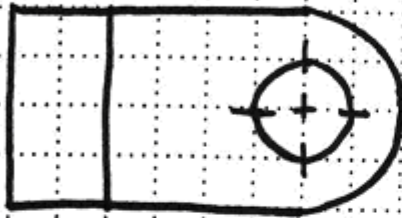
**Date:**

Dimension the object below completely.  
Follow the principles of good dimensioning.



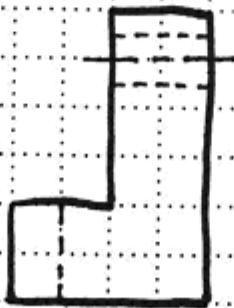
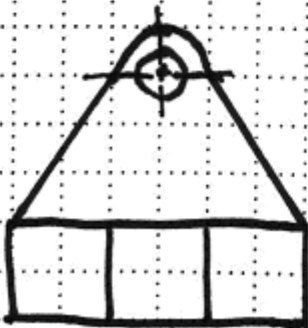

**C**

$\square = 0.25''$



**D**

$\square = 0.25''$



**Title:** Dimensioning 3, Homework  
Cylinders, Cones, & Holes

**Name:**

**CID:**

**Date:**